


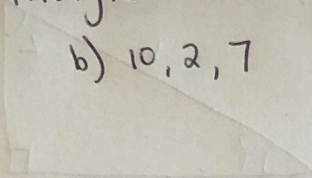
Unit 6 - Triangles COVID-19 Review

① What type of triangle

a) 13, 18, $3\sqrt{55}$

b) 10, 2, 7

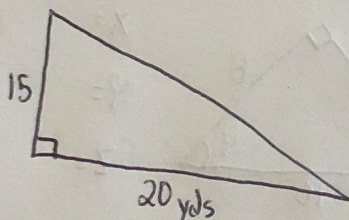
c) 7.6, 10.3, 9.7



② On a hike you head north for 32.7 miles. At this point you stop and rest for the night. In the morning you head east for 13.7 miles. At this point you are too tired to keep going and must return to where you started. What is the shortest distance to where you started you hike?

③ Find the area + perimeter of the triangles

a)



b)

